

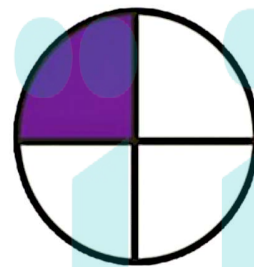
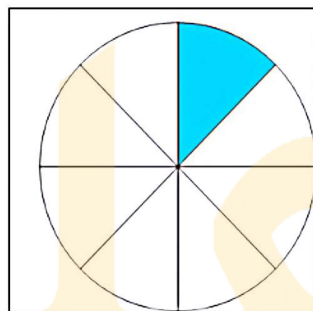

Unit 9 concept 1

Composing and decomposing fraction

Remember :



Write the fraction that expresses the shaded part: (Number of colored parts)



How to read and write fraction?

$\frac{1}{2}$ half

$\frac{1}{3}$ third

$\frac{1}{4}$ quarter

$\frac{1}{5}$ fifth

$\frac{1}{6}$ sixth

$\frac{1}{7}$ seventh

$\frac{1}{8}$ eighth

$\frac{1}{9}$ ninth

$\frac{1}{10}$ tenth

